

Maths Activity Mats

Which numbers come next?

2 3 4

Can you work out the answer?



Which activity would you do at night time?
Circle it.



Which picture comes next in the pattern? Circle it.



1 2 3 4 5 6 7 8 9 10

Maths Activity Mats

Can you write **one more** and **one less** than 12?





one less



one more

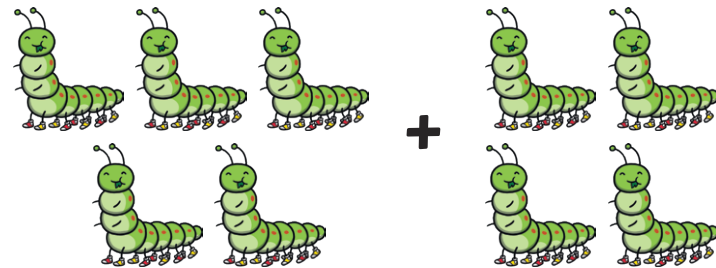
Which shape has **4 sides**? Circle it.



How much money is in the purse?



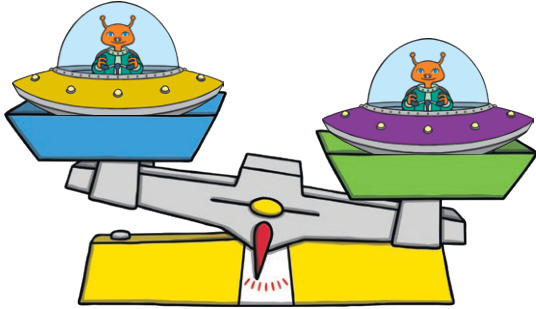
Can you work out the answer?



1 2 3 4 5 6 7 8 9 10

Maths Activity Mats

Which spaceship weighs **more**? Circle it.

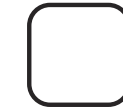


Put the numbers in order from **smallest** to **largest**.

7 10 3




smallest

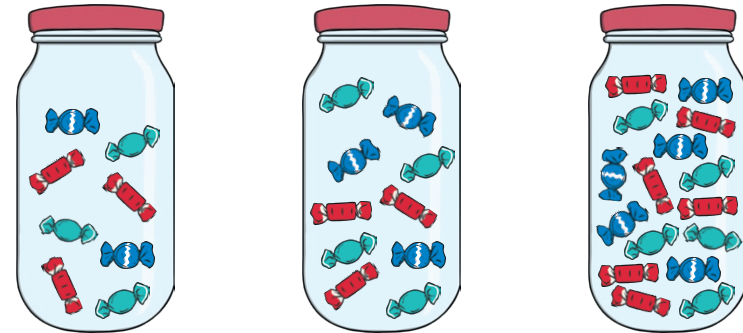


largest

Can you work out the answer?




Which jar has 16 sweets? Circle it.



1 2 3 4 5 6 7 8 9 10

Maths Activity Mats

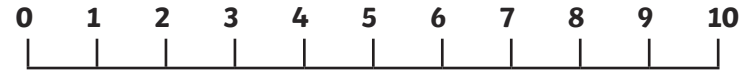
Can you **estimate** how many bees there are?





Count and check.

Can you work out the answer?

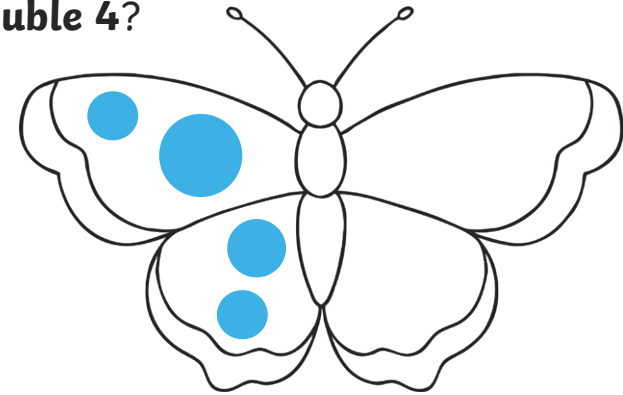
$$4 + 3 = \square$$



How many spots does each ladybird have?



What is **double 4**?



1 2 3 4 5 6 7 8 9 10

Maths Activity Mats

Can you draw a **triangle**?

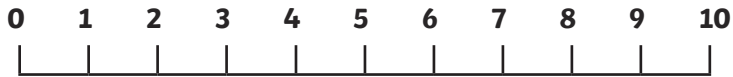
How many corners does it have?

Which number comes next?


8 9 10

Can you work out the answer?

$$6 + 2 = \square$$



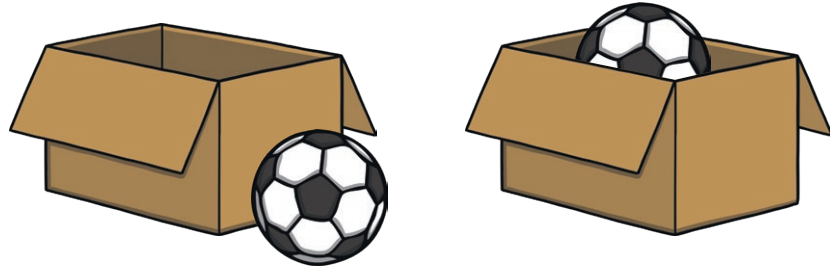
Which snake is the **longest**? Circle it.



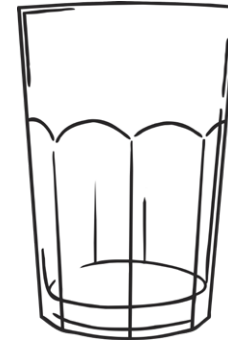
1 2 3 4 5 6 7 8 9 10

Maths Activity Mats


Which picture shows the ball **in the box**? Circle it.



Can you make the glass **half full**?

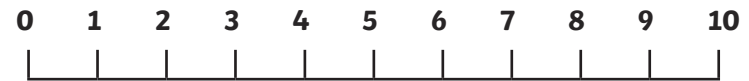


Share **4 cakes** between the **2 teddies**.



Can you work out the answer?

$$8 - 3 = \square$$



1 2 3 4 5 6 7 8 9 10