

Year 2 Maths Activity Mat

①

Section 1


Find the missing numbers:

$$70 + \square = 100$$

$$\square + 80 = 100$$

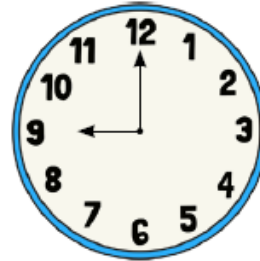
Section 3

I have 16 sweets. I share them between my 2 friends. How many will they each have?



Section 5

What time is the clock showing?



Section 7

Write down 2 facts about circles.

.....

.....

.....

.....

.....

Section 2

What's my number?



I have 2 digits.

My tens digit is the same as $6 - 3$.

My ones digit is odd, and is one less than 8.

Section 4

Make 14p using the fewest number of coins.

Section 6

Write these words in numbers:

sixteen =


forty-one =

twenty-two =

eleven =

Section 8

I have 14 toy cars. I give half of them to my brother. How many do I have left?



Year 2 Maths Activity Mat: 1

Answers

Section 1

Find the missing numbers:

$$70 + \boxed{30} = 100$$

$$\boxed{20} + 80 = 100$$

Section 3

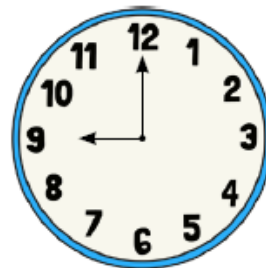
I have 16 sweets. I share them between my 2 friends. How many will they each have?



8

Section 5

What time is the clock showing?



9 o'clock

Section 7

Write down 2 facts about circles.

Accept any two accurate facts about circles e.g. they have one curved side; they have no corners.

Section 2

What's my number?



I have 2 digits.

My tens digit is the same as 6 - 3.

My ones digit is odd, and is one less than 8.

37

Section 4

Make 14p using the fewest number of coins.

10p, 2p, 2p

Section 6

Write these words in numbers:

sixteen =


forty-one =

twenty-two =

eleven =

Section 8

I have 14 toy cars. I give half of them to my brother. How many do I have left?



7